



Reception Maths Assessment

Assesement

By:Star Worksheets

Reception Math Assessment.

Name: _____ Class: _____

Marks: ___/35

Numbers:

1-Name the following numbers.

1	
2	
3	
4	
5	

Marks: ___/5.

2- Write Numbers from 1 to 10 in words.

1	2		4	
One		Three		Five

	7		9	
Six		Eight		Ten

Marks: /10

Counting:

1- How many cars?



Marks: ___/1.

Reception Math Assessment.

2- How many flowers?



Marks: ____/1.

3- Count the bees and circle the correct number of bees?



7

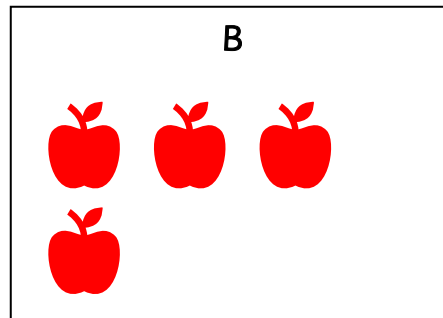
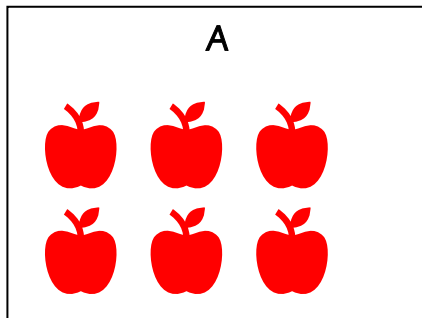
4

6

9

Marks: ____/1.

4- Which set has more apples?



Set

Marks: ____/2.

5- Which number is one more than the following numbers?

7 _____ 9 _____ 2 _____

Marks: ____/3.

6- Which number is one less than the following numbers?

5 _____ 4 _____ 10 _____

Marks: ____/3.

Reception Math Assessment.



Geometry:

1-Circle the first tree and tick the last tree.



Marks: ____/2.

2-Draw a line to match the shape.







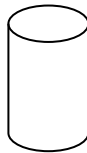
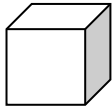
Square

Rectangle

Triangle

Marks: ____/3.

3- Name the 3 D shapes in the boxes below:



Marks: ____ /3

4-Which aeroplane is shorter?



Marks: ____/1.